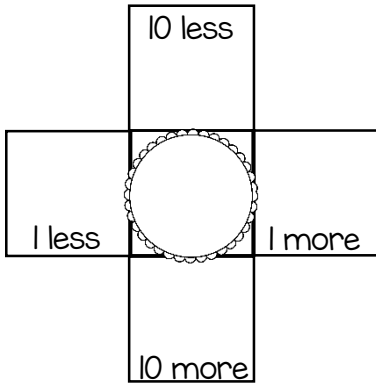


Name _____



Number of the Day!

_____ hundreds, _____ tens, _____ ones



Draw coins to make that amount.



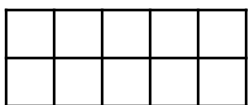
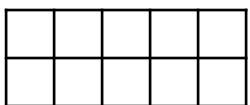
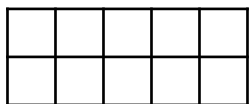
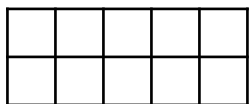
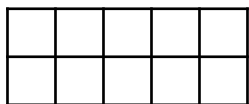
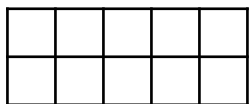
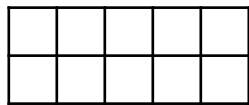
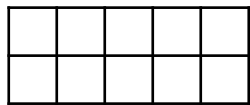
Draw tally marks to make that amount.

Circle the answer:

even

odd

Fill in the tens frames.



$$\bigcirc + 20 = \underline{\hspace{2cm}}$$

$$\bigcirc + 30 = \underline{\hspace{2cm}}$$

$$\bigcirc + 40 = \underline{\hspace{2cm}}$$

$$\bigcirc + 50 = \underline{\hspace{2cm}}$$

$$\bigcirc + 60 = \underline{\hspace{2cm}}$$

Do you love MATH CENTERS?

First Grade MATH CENTERS

Full Year Bundle



Created by Nicole O'Connor

I recently bundled all of my math centers together. The bundle contains over 100 math centers total.

Click this link below to view my [First Grade Math Centers Bundle!](#)

Grab the bundle and SAVE BIG!